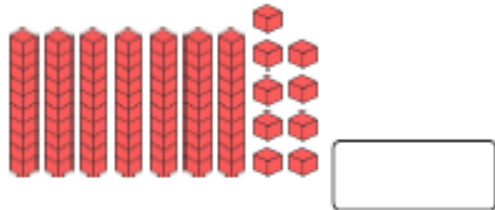


Day 5– Maths recap of learning


Section 1

Write the number in the box.



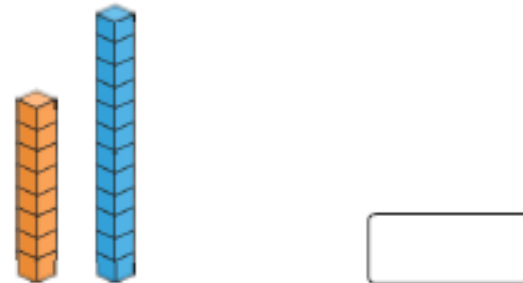
Section 3

What numbers come next?




Section 4

How many cubes taller is the blue tower than the orange tower?



Section 5

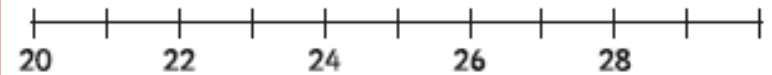


4 lots of 5 fingers =

Section 6

Put these numbers on the number line.

23 30 25 21 27 29



Section 7

20 is 1 more than

17 is 1 more than

Section 8

Archie has eaten 2 sausages.

He has 3 left.

How many sausages did he have to start with?

Write a number sentence to show this.

